
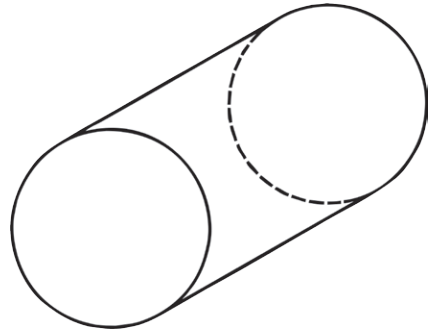


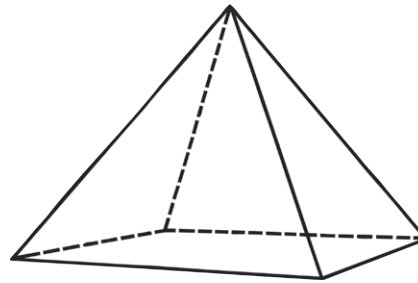
# Name the 3D Shape



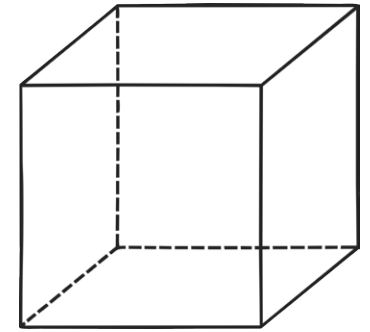
Shape of faces: \_\_\_\_\_  
Number of vertices: \_\_\_\_\_  
Number of edges: \_\_\_\_\_  
Name: \_\_\_\_\_



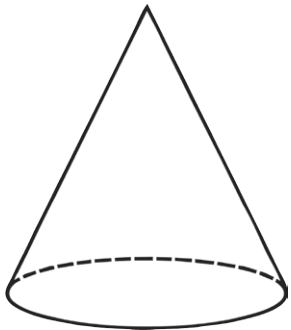
Shape of faces: \_\_\_\_\_  
Number of vertices: \_\_\_\_\_  
Number of edges: \_\_\_\_\_  
Name: \_\_\_\_\_



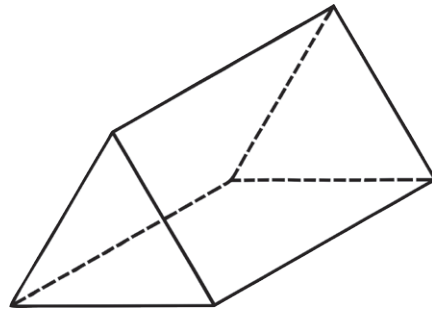
Shape of faces: \_\_\_\_\_  
Number of vertices: \_\_\_\_\_  
Number of edges: \_\_\_\_\_  
Name: \_\_\_\_\_



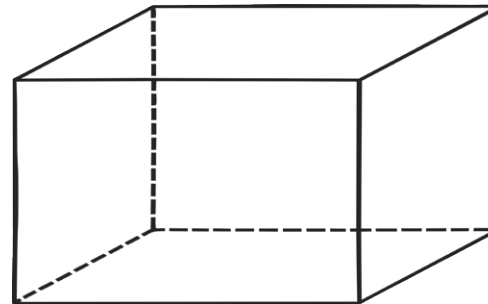
Shape of faces: \_\_\_\_\_  
Number of vertices: \_\_\_\_\_  
Number of edges: \_\_\_\_\_  
Name: \_\_\_\_\_



Shape of faces: \_\_\_\_\_  
Number of vertices: \_\_\_\_\_  
Number of edges: \_\_\_\_\_  
Name: \_\_\_\_\_



Shape of faces: \_\_\_\_\_  
Number of vertices: \_\_\_\_\_  
Number of edges: \_\_\_\_\_  
Name: \_\_\_\_\_



Shape of faces: \_\_\_\_\_  
Number of vertices: \_\_\_\_\_  
Number of edges: \_\_\_\_\_  
Name: \_\_\_\_\_

